



MATHEMATICS  
CH:10- MEASUREMENT

Name : \_\_\_\_\_

Date \_\_\_\_\_

Class: II Sec: \_\_\_\_

I. Decide whether these lengths are long or short and use m or cm accordingly

a. The thickness of a book = \_\_\_\_\_

b. The height of a car = \_\_\_\_\_

c. The length of a table = \_\_\_\_\_

d. The height of a building = \_\_\_\_\_

e. The height of a bottle = \_\_\_\_\_

f. The length of a plane = \_\_\_\_\_

II. Decide whether you would measure these quantities in ml and l :

a. Water in a small cup = \_\_\_\_\_

b. Milk in a baby's feeding bottle = \_\_\_\_\_

c. A bathtub full of water = \_\_\_\_\_

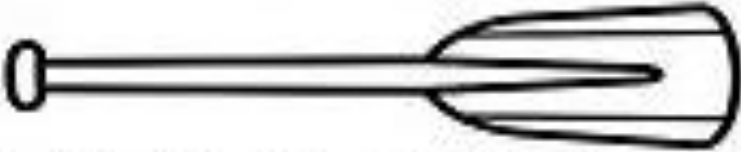
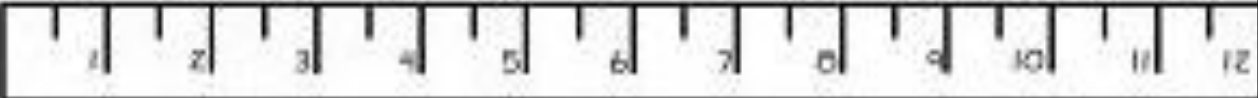
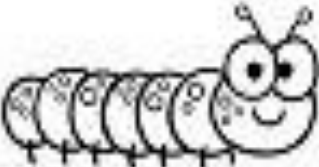
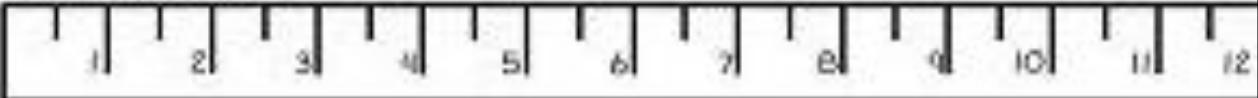

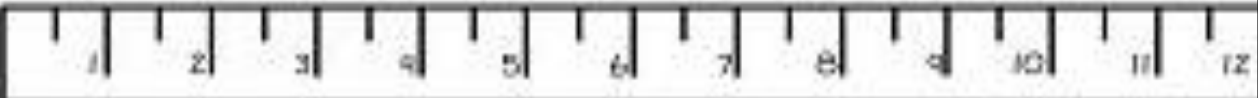

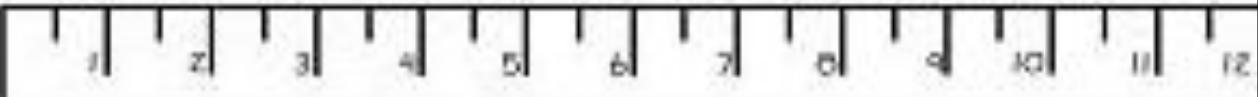

d. A can filled with oil = \_\_\_\_\_

e. A spoonful of medicine = \_\_\_\_\_



# INDIAN SCHOOL NIZWA - WORKSHEET

Measure in Centimeters:

	_____
	
	_____
	
	_____
	
	_____
	
	_____
